


$$4n - 5$$

Find the nth term

20, 10, 0, -10



Finding the nth term


$$150 - 20n$$

Find the nth term

13, 22, 31, 40



Finding the nth term


$$4n - 3$$

Find the nth term

-2, 4, 10, 16



Finding the nth term


$$99 - 10n$$

Find the nth term

87, 82, 77, 72



Finding the nth term


$$5n + 2$$

Find the nth term

22, 24, 26, 28



Finding the nth term


$$48 - 4n$$

Find the nth term

89, 79, 69, 59



Finding the nth term


$$3n - 3$$

Find the nth term

-5, 0, 5, 10



Finding the nth term


$$30 - 10n$$

Find the nth term

3, 11, 19, 27

Finding the nth term


$$3 - 3n$$

Find the nth term

47, 44, 41, 38



Finding the nth term


$$6n - 8$$

Find the nth term

40, 35, 30, 25

Finding the nth term


$$20 + 2n$$

Find the nth term

0, -3, -6, -9



Finding the nth term


$$20n - 5$$

Find the nth term

0, 3, 6, 9



Finding the nth term


$$43 - 4n$$

Find the nth term

7, 12, 17, 22



Finding the nth term


$$92 - 5n$$

Find the nth term

-1, 3, 7, 11

Finding the nth term


$$8n - 5$$

Find the nth term

1, 5, 9, 13



Finding the nth term


$$9n + 4$$

Find the nth term

15, 35, 55, 75



Finding the nth term


$$45 - 5n$$

Find the nth term

130, 110, 90, 70



Finding the nth term


$$62 - 2n$$

Find the nth term

39, 35, 31, 27


Finding the nth term


$$50 - 3n$$

Find the nth term

44, 40, 36, 32

Finding the nth term


$$5n - 10$$

Find the nth term

60, 58, 56, 54

Finding the nth term

Answer Sheet

Finding the nth term

