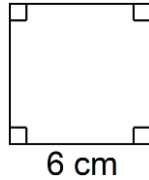
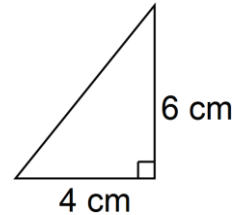


Problem 1

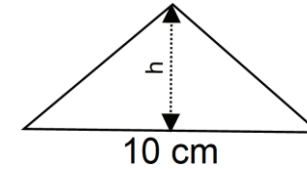
Calculate the area of the square



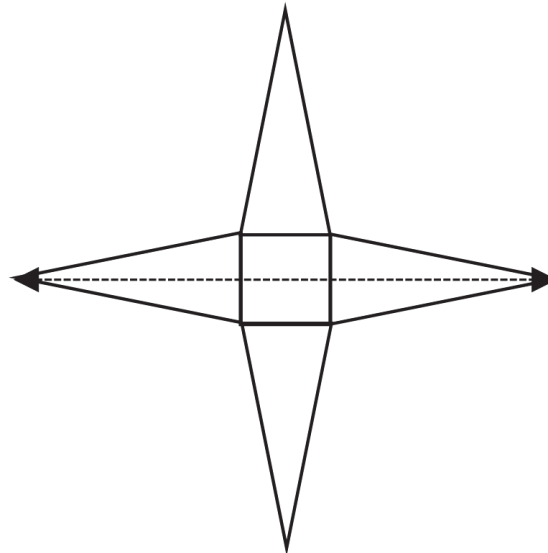
Calculate the area of the triangle



If the triangle has an area of 40 cm^2 calculate the height



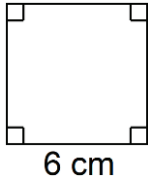
The logo shown below has a total area of 125 cm^2 and the square has side length 5 cm. Calculate the width of the logo



Problem 1

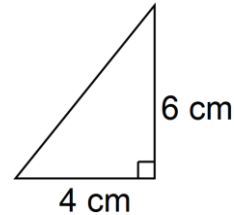
Calculate the area of the square

$$6 \times 6 = 36 \text{ cm}^2$$

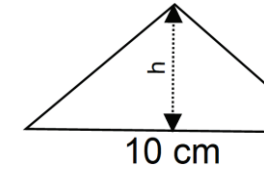


Calculate the area of the triangle

$$\frac{1}{2} \times 6 \times 4 = 12 \text{ cm}^2$$



If the triangle has an area of 40 cm^2 calculate the height



$$\frac{1}{2} \times 10 \times h = 40$$

$$5h = 40$$

$$h = 8 \text{ cm}$$

The logo shown below has a total area of 125 cm^2 and the square has side length 5 cm. Calculate the width of the logo

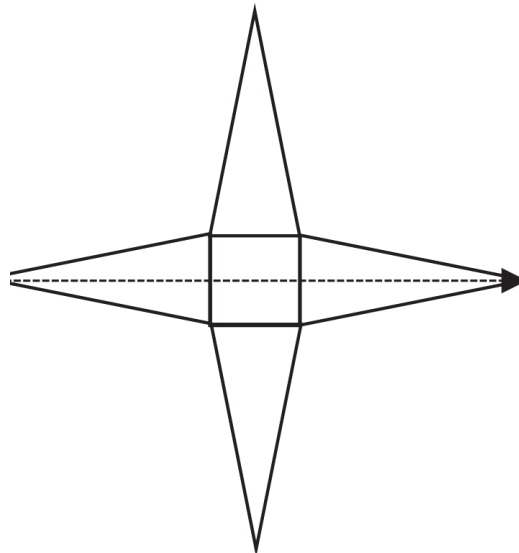
$$5 \times 5 = 25 \text{ cm}^2$$

4 triangles have an area of 100 cm^2

1 triangle has an area of 25 cm^2

$$\frac{1}{2} \times 5 \times h = 25$$

$$h = 10 \text{ cm}$$



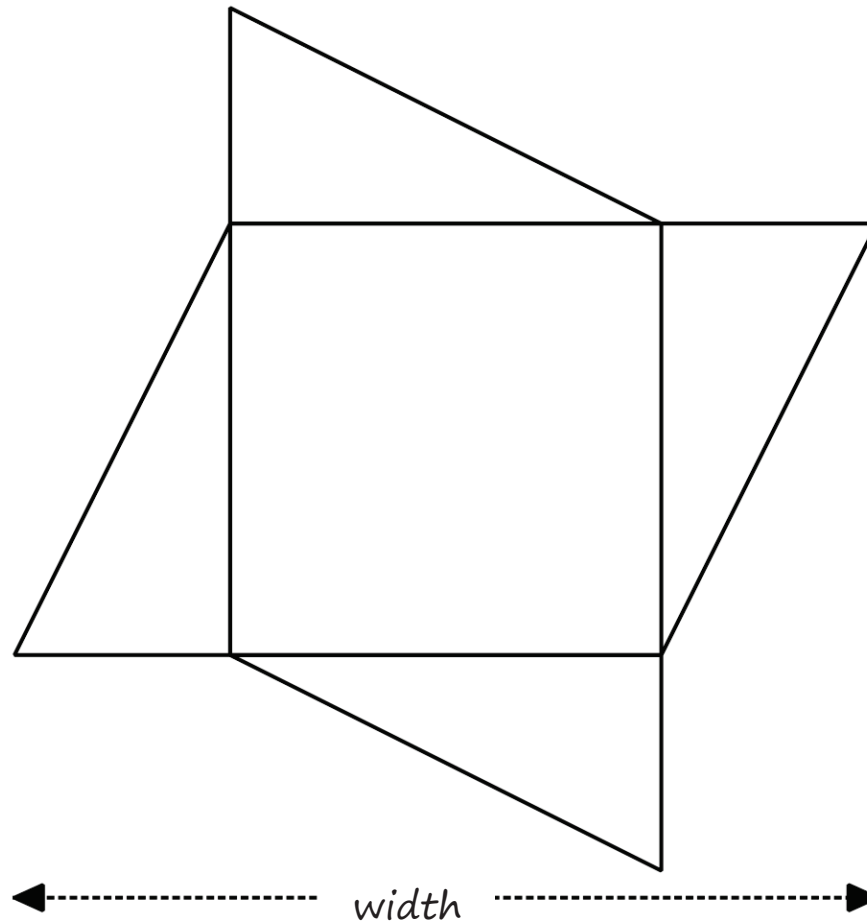
Total width

$$10 \text{ cm} + 5 \text{ cm} + 10 \text{ cm}$$

$$= 25 \text{ cm}$$

PROBLEM 1A

The logo shown below has a total area of 112 cm^2 . The square has a side length of 8 cm and all of the triangles are identical. Calculate the width of the logo.



PROBLEM 1A

The logo shown below has a total area of 112 cm^2 . The square has a side length of 8 cm and all of the triangles are identical. Calculate the width of the logo.

Area of the square
 $8 \times 8 = 64 \text{ cm}^2$

Area of the triangles
 $112 - 64 = 48 \text{ cm}^2$

Area of one triangle
 $48 \div 4 = 12 \text{ cm}^2$

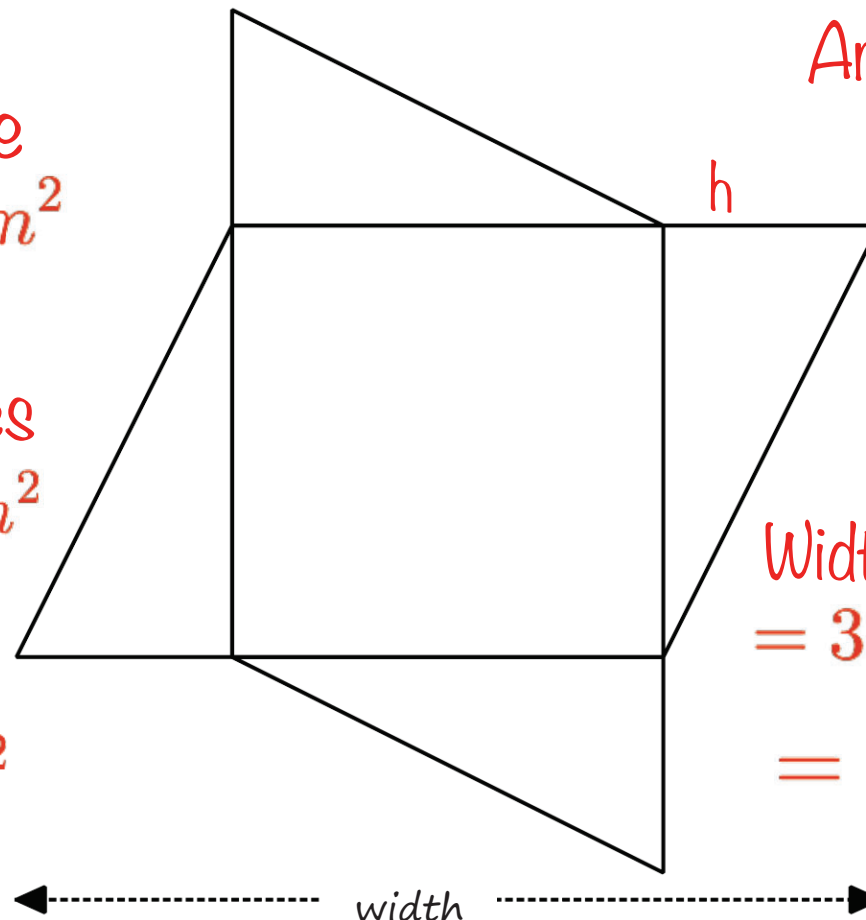
Area of a triangle

$$\frac{1}{2} \times 8 \times h = 12$$

$$h = 3 \text{ cm}$$

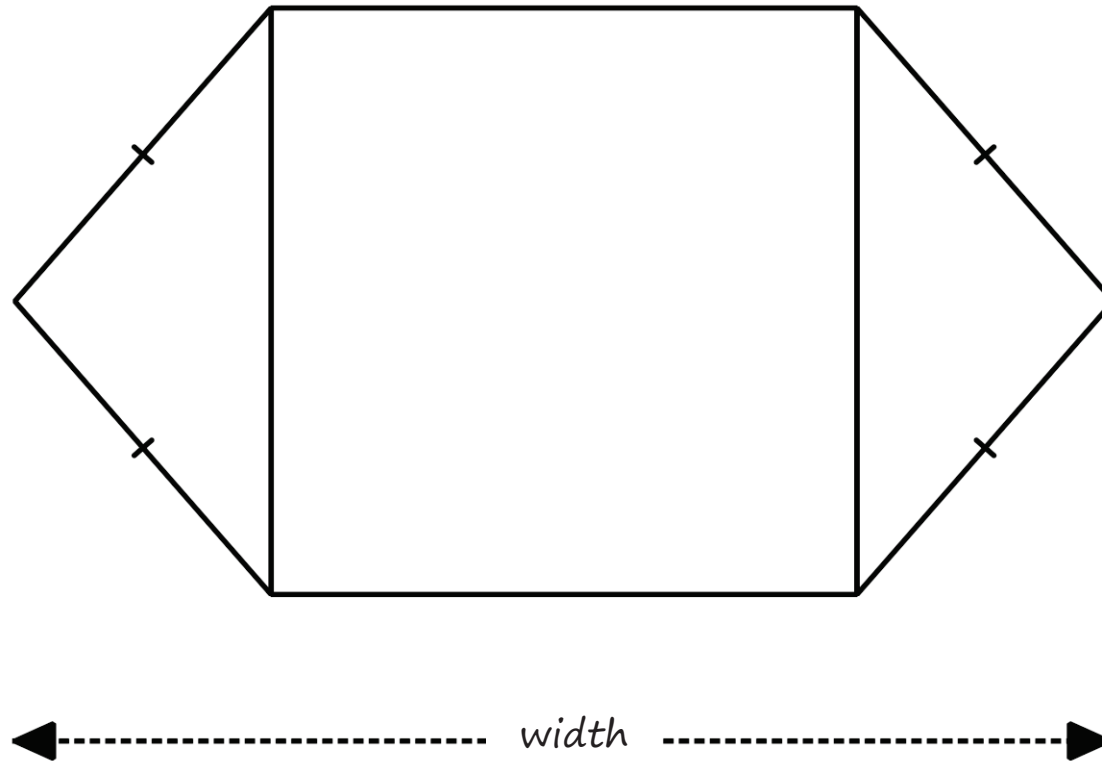
Width

$$\begin{aligned} &= 3 \text{ cm} + 8 \text{ cm} + 3 \text{ cm} \\ &= 14 \text{ cm} \end{aligned}$$



PROBLEM 1B

The logo shown below has a total area of 204 cm^2 . The square has a side length of 12 cm . Calculate the width of the logo.




PROBLEM 1B

The logo shown below has a total area of 204 cm^2 . The square has a side length of 12 cm . Calculate the width of the logo.

Area of the square
 12×12
 $= 144 \text{ cm}^2$

Area of the triangles

$$204 - 144$$
$$= 60 \text{ cm}^2$$



Area of one triangle

$$60 \div 2$$
$$= 30 \text{ cm}^2$$

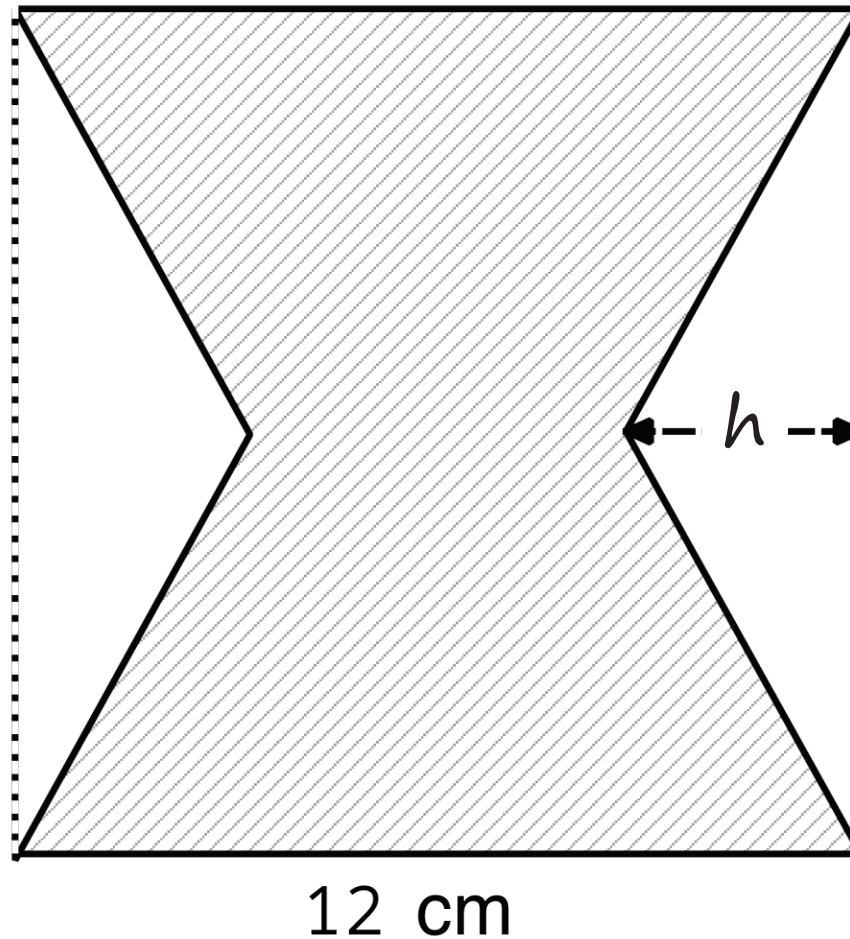
$$\frac{1}{2} \times 12 \times h = 30$$
$$h = 5 \text{ cm}$$

Width

$$5 + 12 + 5$$
$$= 22 \text{ cm}$$

PROBLEM 1C

The logo shown below is a made from a square with 2 congruent isosceles triangles removed. It has a total area of 108 cm^2 . Calculate h .

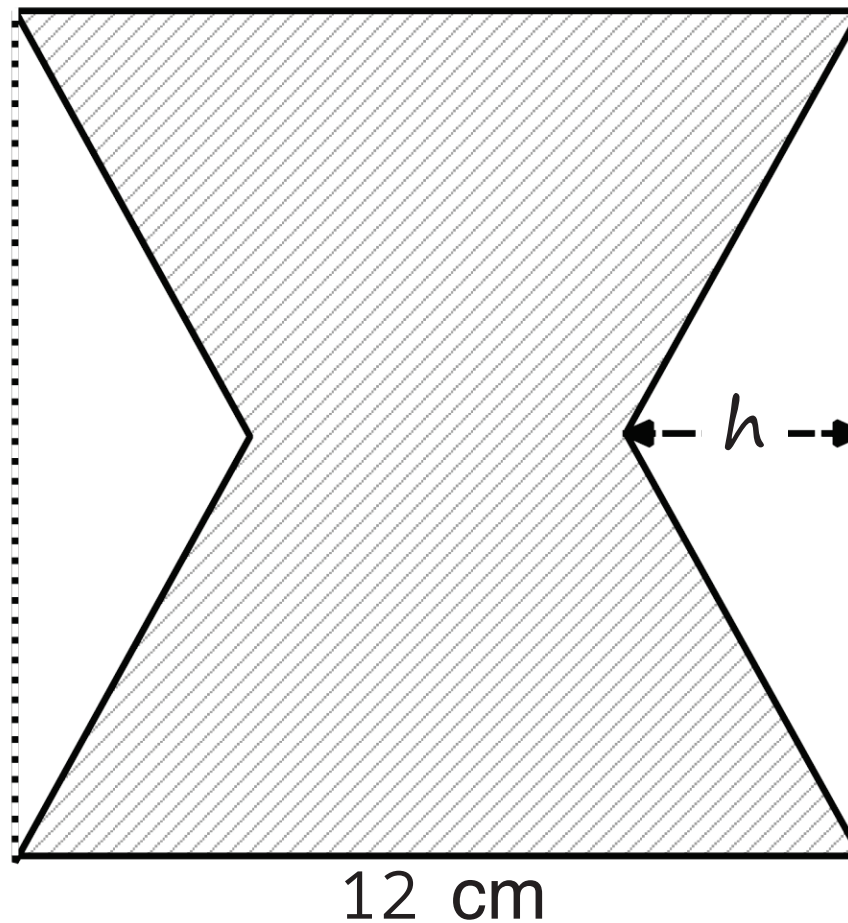


PROBLEM 1C

The logo shown below is a made from a square with 2 congruent isosceles triangles removed. It has a total area of 108 cm^2 . Calculate h .

Area of the
full square
 12×12
 $= 144 \text{ cm}^2$

Area of the triangles
 $144 - 108$
 36 cm^2



Area of one
triangle

$$36 \div 2 =$$
$$= 18 \text{ cm}^2$$

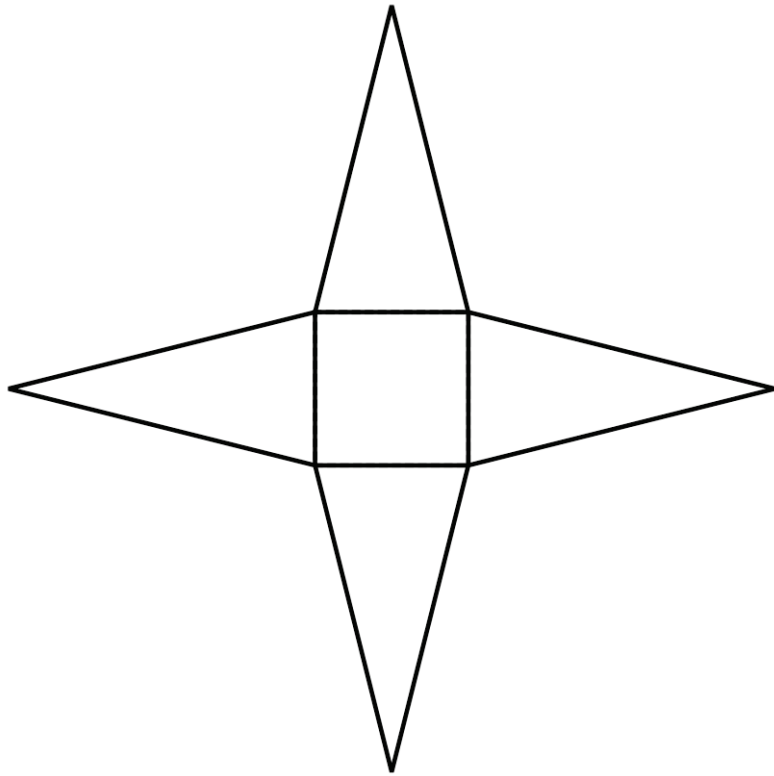
$$\frac{1}{2} \times 12 \times h = 18$$

$$h = 3 \text{ cm}$$

PROBLEM 10

The logo shown below is made from a square with side length 6 cm and 4 congruent isosceles triangles. It has a total area of 156 cm^2 .

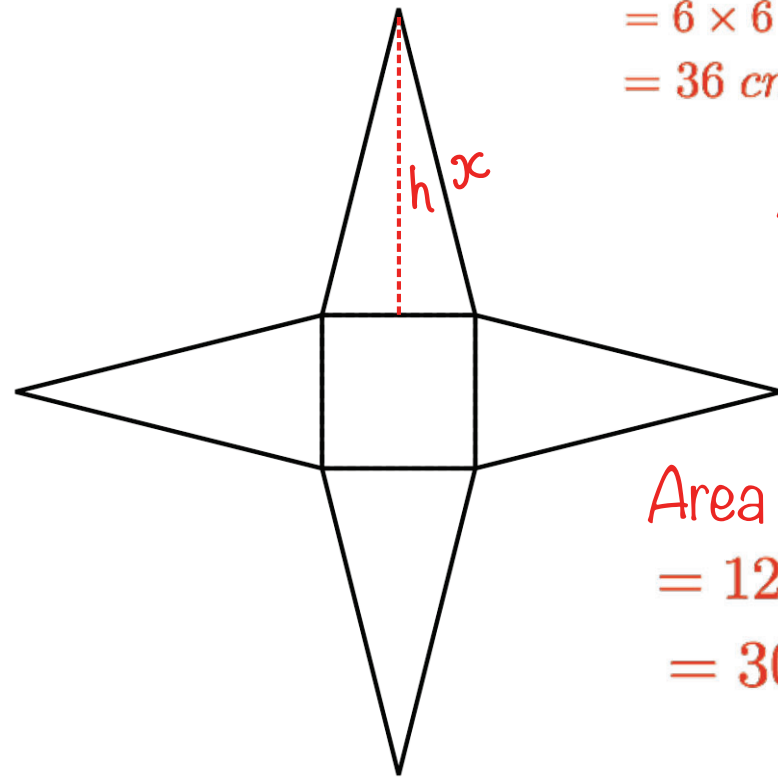
Calculate the perimeter of the logo.



PROBLEM 10

The logo shown below is a made from a square with side length 6 cm and 4 congruent isosceles. It has a total area of 156 cm^2 .

Calculate the perimeter of the logo.



$$\begin{aligned}\text{Area of the square} \\ &= 6 \times 6 \\ &= 36 \text{ cm}^2\end{aligned}$$

$$\begin{aligned}\frac{1}{2} \times 6 \times h &= 30 \\ h &= 10 \text{ cm}\end{aligned}$$

$$\begin{aligned}\text{Area of the triangles} \\ 156 - 36 \\ &= 120 \text{ cm}^2\end{aligned}$$

$$\begin{aligned}x^2 &= 10^2 + 3^2 \\ x &= \sqrt{109} \\ &= 10.44\end{aligned}$$

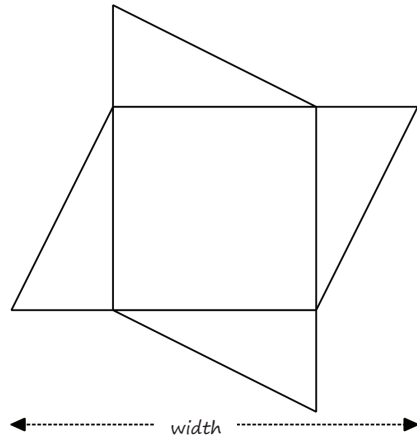
$$\begin{aligned}\text{Area of a triangle} \\ &= 120 \div 4 \\ &= 30 \text{ cm}\end{aligned}$$

$$\begin{aligned}\text{Perimeter} \\ 8 \times 10.44 \\ &= 83.52 \text{ cm}\end{aligned}$$

R

PROBLEM 1A

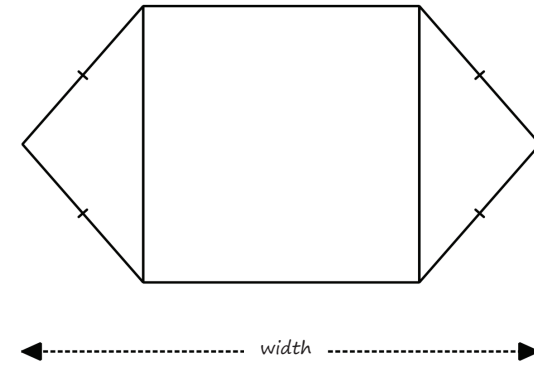
The logo shown below has a total area of 112 cm^2 . The square has a side length of 8 cm and all of the triangles are identical. Calculate the width of the logo.



www.mathsbox.org.uk

PROBLEM 1B

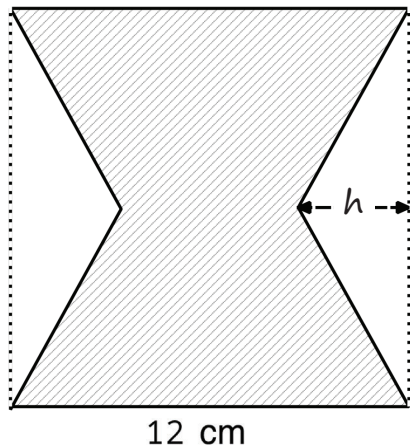
The logo shown below has a total area of 204 cm^2 . The square has a side length of 12 cm . Calculate the width of the logo.



www.mathsbox.org.uk

PROBLEM 1C

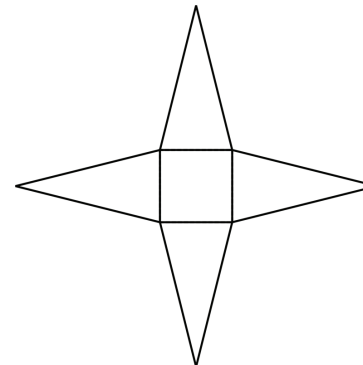
The logo shown below is made from a square with 2 congruent isosceles triangles removed. It has a total area of 108 cm^2 . Calculate h .



www.mathsbox.org.uk

PROBLEM 1D

The logo shown below is made from a square with side length 6 cm and 4 congruent isosceles triangles. Calculate the perimeter of the logo.



www.mathsbox.org.uk

PROBLEM 1A

The logo shown below has a total area of 112 cm^2 . The square has a side length of 8 cm and all of the triangles are identical. Calculate the width of the logo.

Area of the square
 $8 \times 8 = 64 \text{ cm}^2$

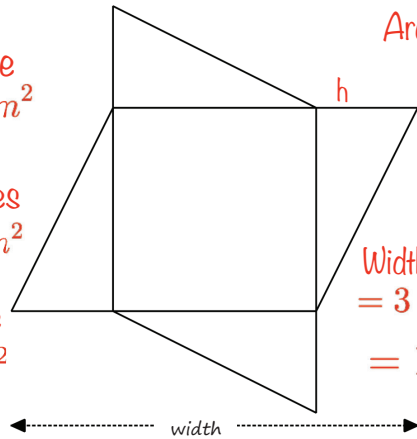
Area of the triangles
 $112 - 64 = 48 \text{ cm}^2$

Area of one triangle
 $48 \div 4 = 12 \text{ cm}^2$

Area of a triangle
 $\frac{1}{2} \times 8 \times h = 12$

$h = 3 \text{ cm}$

Width
 $= 3 \text{ cm} + 8 \text{ cm} + 3 \text{ cm}$
 $= 14 \text{ cm}$



PROBLEM 1B

The logo shown below has a total area of 204 cm^2 . The square has a side length of 12 cm . Calculate the width of the logo.

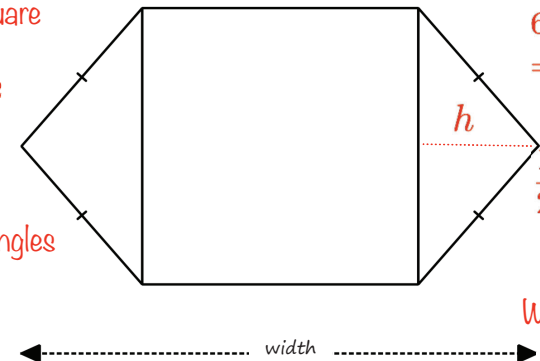
Area of the square
 12×12
 $= 144 \text{ cm}^2$

Area of the triangles
 $204 - 144$
 $= 60 \text{ cm}^2$

Area of one triangle
 $60 \div 2$
 $= 30 \text{ cm}^2$

$\frac{1}{2} \times 12 \times h = 30$
 $h = 5 \text{ cm}$

Width
 $= 5 + 12 + 5$
 $= 22 \text{ cm}$



PROBLEM 1C

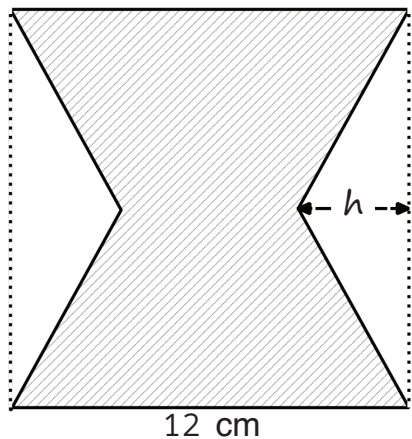
The logo shown below is made from a square with 2 congruent isosceles triangles removed. It has a total area of 108 cm^2 . Calculate h .

Area of the full square
 12×12
 $= 144 \text{ cm}^2$

Area of the triangles
 $144 - 108$
 36 cm^2

Area of one triangle
 $36 \div 2 =$
 $= 18 \text{ cm}^2$

$\frac{1}{2} \times 12 \times h = 18$
 $h = 3 \text{ cm}$



PROBLEM 1D

The logo shown below is made from a square with side length 6 cm and 4 congruent isosceles triangles. It has a total area of 156 cm^2 .

Calculate the perimeter of the logo.

Area of the square
 $= 6 \times 6$
 $= 36 \text{ cm}^2$

Area of the triangles
 $156 - 36$
 $= 120 \text{ cm}^2$

Area of a triangle
 $= 120 \div 4$
 $= 30 \text{ cm}^2$

$\frac{1}{2} \times 6 \times h = 30$
 $h = 10 \text{ cm}$

$x^2 = 10^2 + 3^2$
 $x = \sqrt{109}$
 $= 10.44$

Perimeter
 8×10.44
 $= 83.52 \text{ cm}$

