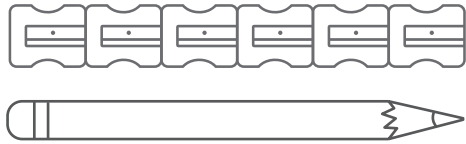




1

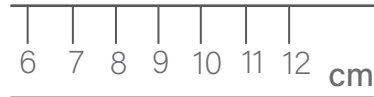
If each sharpener is 2cm long, what is the length of the pencil?



not to scale

2

What is the width of the coin?



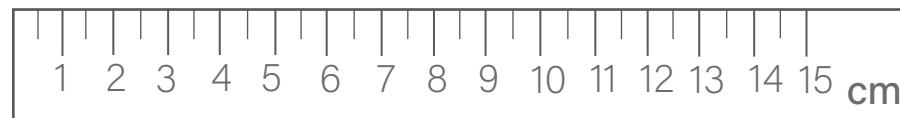
not to scale

3

How many millimeters in 7.5 cm?

4 - mixed

If the match sticks are 4cm long, what is the perimeter of the rectangle in mm?

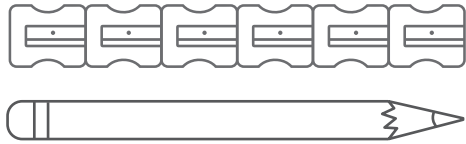


not to scale



1

If each sharpener is 2cm long, what is the length of the pencil?

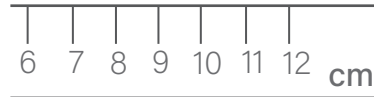


12 cm

not to scale

2

What is the width of the coin?



3 cm

not to scale

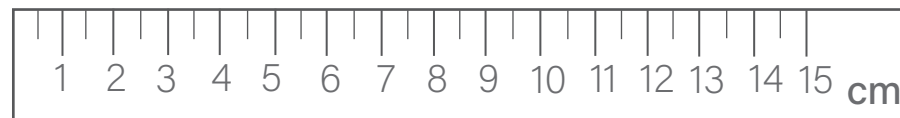
3

How many millimeters in 7.5 cm?

75 mm

4 - mixed

If the match sticks are 4cm long, what is the perimeter of the rectangle in mm?



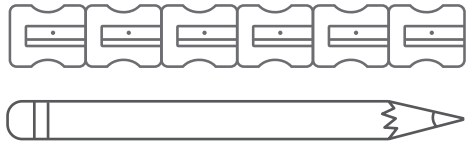
390 mm

not to scale



1

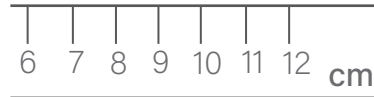
If each sharpener is 2cm long, what is the length of the pencil?



not to scale

2

What is the width of the coin?



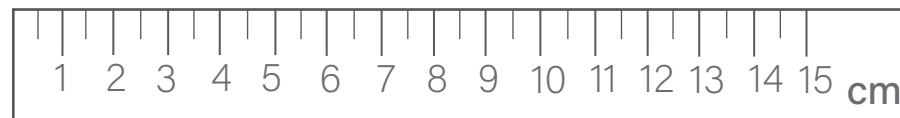
not to scale

3

How many millimeters in 7.5 cm?

4 - mixed

If the match sticks are 4cm long, what is the perimeter of the rectangle in mm?

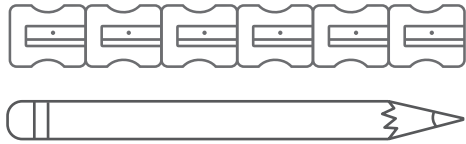


not to scale



1

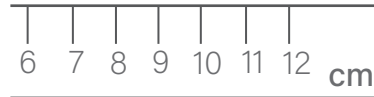
If each sharpener is 2cm long, what is the length of the pencil?



not to scale

2

What is the width of the coin?



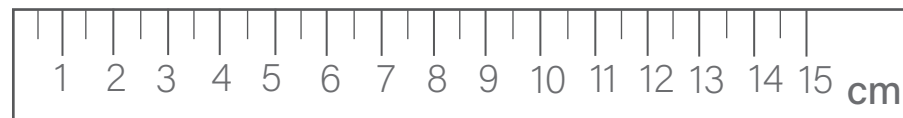
not to scale

3

How many millimeters in 7.5 cm?

4 - mixed

If the match sticks are 4cm long, what is the perimeter of the rectangle in mm?



not to scale